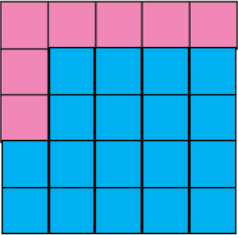
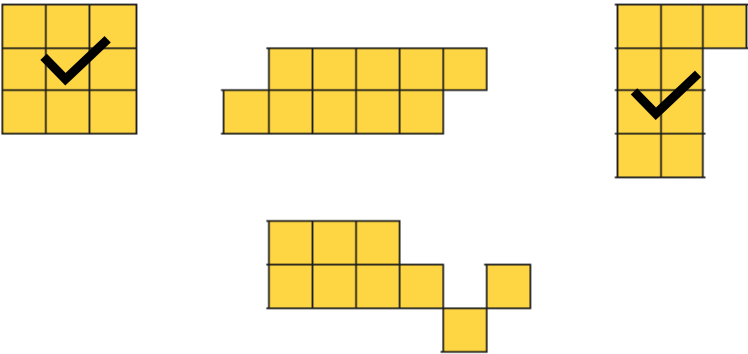
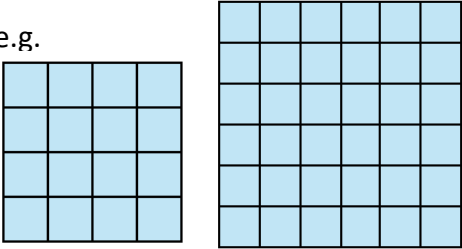


Question	Answer
1	Three shapes made from 5 squares.
2	a) Shape made from 9 squares. b) Shape made from 13 squares.
3	Two different rectilinear shapes with an area of 11 squares.
4	Shape made by shading 8 more squares.
5	a) Multiple possible answers, e.g.  b) Multiple possible answers linked to a) e.g. 25 squares
6	
7	False Multiple possible answers, e.g. 
8	Yes Both shapes have an area of 8 squares.
9	No Tiny has drawn a shape that has an area of 6 squares but it is not a rectilinear shape. A rectilinear shape needs to touch at the sides and not just at the corners.